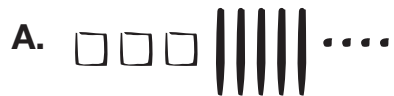


**Part 4 Showing Numbers**

1. Write a number sentence that shows the value of the base-ten pieces. The first one is done for you.



354 = 300 + 50 + 4



\_\_\_\_\_



\_\_\_\_\_



\_\_\_\_\_

2. Use base-ten shorthand to represent the following numbers.


A. 76

B. 129


C. 32

D. 344


3. Write the number using the Fewest Pieces Rule.



\_\_\_\_\_



\_\_\_\_\_



\_\_\_\_\_



\_\_\_\_\_