





### Check-In: Questions 7–12

7.



\_\_\_\_\_


8.



\_\_\_\_\_


9. Tell how you decided the time shown on the clock in Question 7.

10.



\_\_\_\_\_

11.



\_\_\_\_\_

12. Tell how you decided the time shown on the clock in Question 11.