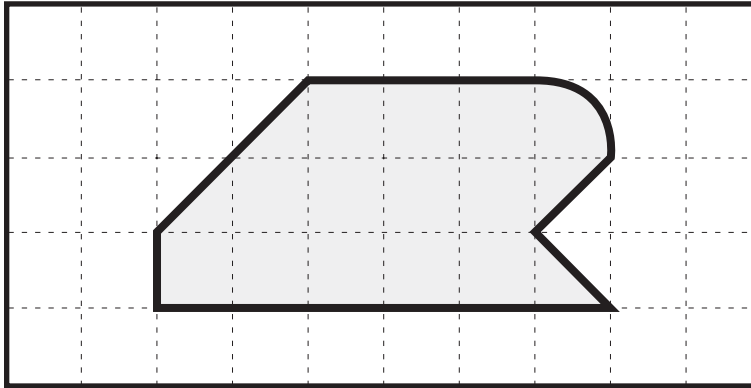
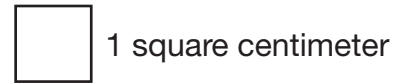


# Check Each Other

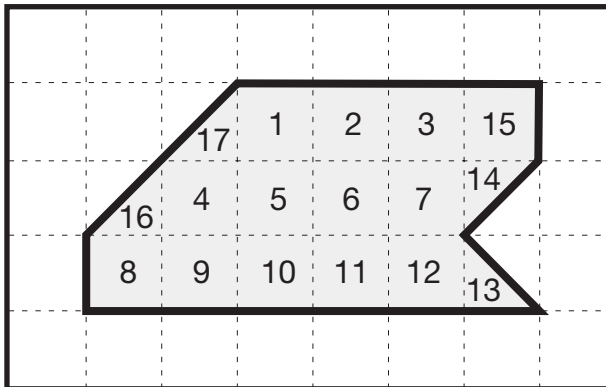
1. Find the area in square centimeters.



Area \_\_\_\_\_

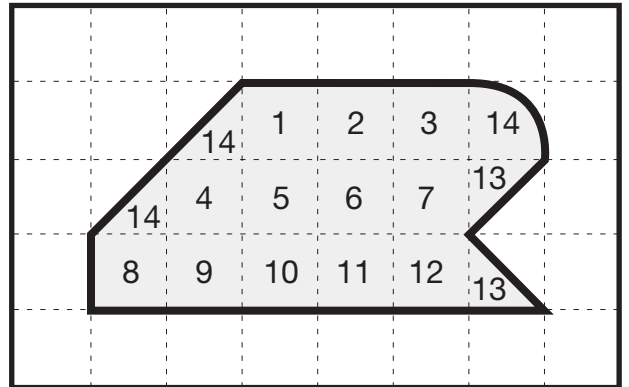
2. Luis and Grace each found the area of the shape in Question 1. Look at their work.

Luis's Work



The area is about 17 square centimeters.

Grace's Work



The area is about 14 square centimeters.

- A. Do you agree with these students? Why or why not?
- B. How can Luis improve his work?
- C. How can Grace improve her work?