



Time and Time Again

The minute hand is missing from these clocks. About what time is it? Use your clock.

1.

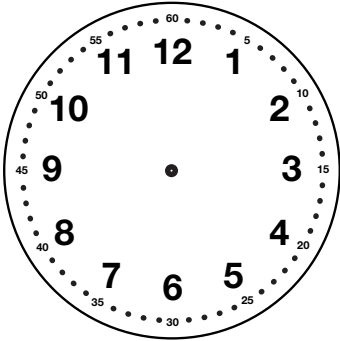


2.

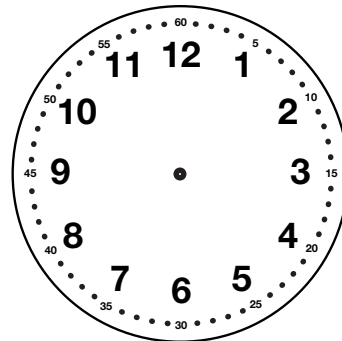


Show the time on your own clock. Then draw the hands on the clocks below.

3. 2:25




4. 9:10

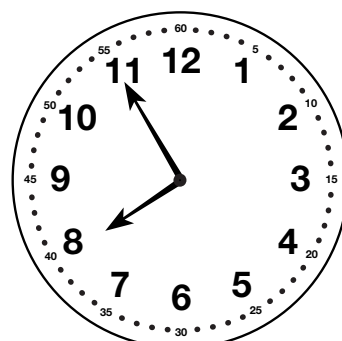


Write the times that are shown on the clock faces below.

5.



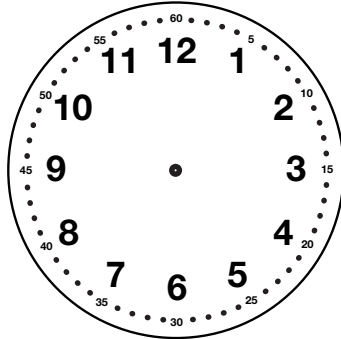
6.



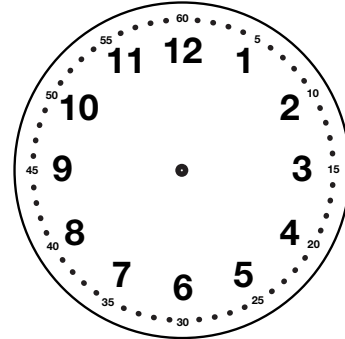
Show the start time, stop time, and the elapsed time for each of the following problems. Use your clock.

7. Richard started to read at 7:30. He read until his dad told him to go to sleep at 9:00.

Start Time



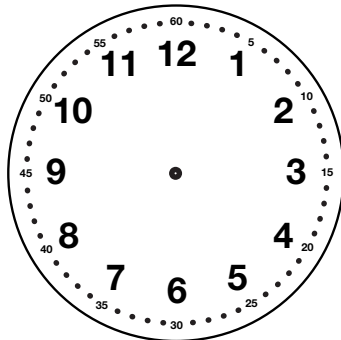
Stop Time



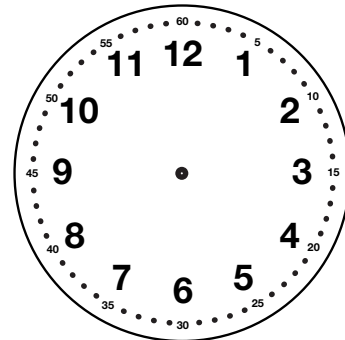
Elapsed time _____

8. Emily started cleaning the yard at 2:15. She finished her work at 3:30.

Start Time



Stop Time



Elapsed time _____

9. Mark said it took him 1 hour and 15 minutes to put the newspapers in bags for recycling. He started at 10:30. What time did he finish his work?

10. Liz and her mother went shopping. They were gone for 2 hours and 10 minutes. If they got home at 4:30, what time did they leave?

	Expectation	Check In	Comments
Solve problems involving time measurement to the nearest five minutes. [Q# 7–10]	E2		
Write and tell time to the nearest five minutes. [Q# 1–8]	E4		