





Connect Addition Methods





Use mental math strategies to estimate the sums. Then solve each of the addition problems using base-ten pieces. Finally, solve the problems using a paper-and-pencil method.

1.

			
1000s	100s	10s	1s





$$\begin{array}{r} 17 \\ + 32 \\ \hline \end{array}$$

2.

			
1000s	100s	10s	1s





$$\begin{array}{r} 27 \\ + 35 \\ \hline \end{array}$$

3.

			
1000s	100s	10s	1s

$$\begin{array}{r} 83 \\ + 32 \\ \hline \end{array}$$

4.

			
1000s	100s	10s	1s

$$\begin{array}{r} 26 \\ 66 \\ + 18 \\ \hline \end{array}$$