









**Solve the problems using base-ten shorthand. Then record your work on the recording sheet.**





**2.**  $69 + 23 + 18$

 1000s	 100s	 10s	 1s





**3.**  $324 + 194$

 1000s	 100s	 10s	 1s

**4.**  $2607 + 748$

 1000s	 100s	 10s	 1s

**5.**  $1308 + 4196$

 1000s	 100s	 10s	 1s