





Strategies to Add

Using Base-Ten Pieces




Self-Check: Question 1

1. Solve $26 + 13$ using base-ten pieces. Record your work with base-ten shorthand and the recording sheet.

 1000s	 100s	 10s	 1s	Number Sentences

Use the Workshop Menu to choose practice with using base-ten pieces.

Workshop Menu			
Can I Do This?	▲ Working On It!  I could use some extra help.	● Getting It!  I just need some more practice.	■ Got It!  I'm ready for a challenge.
Use the base-ten pieces to add.	Questions 2–4, 8–9	Questions 4–9	Questions 4, 6–9