


Using Mental Math Strategies

Self-Check: Questions 10–11




10. Use a mental math strategy to solve $64 + 59$. Explain your strategy.



11. Use a number line to show how to solve $458 + 302$.



Use the Workshop Menu to choose practice with using mental math strategies to add.

Workshop Menu			
Can I Do This?	▲ Working On It!  I could use some extra help.	● Getting It!  I just need some more practice.	■ Got It!  I'm ready for a challenge.
Use mental math strategies to add.	Questions 12–14, 15E–G	Questions 13–15	Questions 14–15