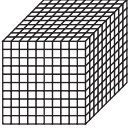
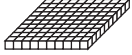


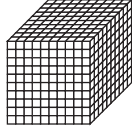
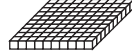




Solve the following problems. Think of base-ten pieces as you record your trades.

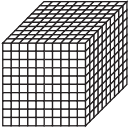
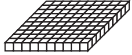


2.

			
1000s	100s	10s	1s
		3	9
		- 2	4

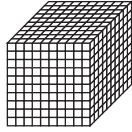
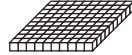


3.

			
1000s	100s	10s	1s
		7	3
		- 4	5

4.

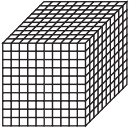
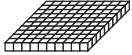


			
1000s	100s	10s	1s
	4	5	2
	- 2	2	9

5.

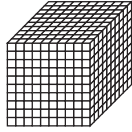
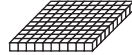


			
1000s	100s	10s	1s
	6	7	8
	- 1	9	2

 **Check-In: Questions 6-7**

6.

			
1000s	100s	10s	1s
	8	4	6
	- 3	8	8

7.

			
1000s	100s	10s	1s
3	3	5	4
- 1	8	1	6