



More Time


Write the time shown on each clock. Give each time to the nearest minute. You can use your individual clocks.



1. _____



2. _____



3. _____

Answer the following questions.. Then explain how you found your answers.

4. Kathy went to see a movie. It started at 7:15. It ended at 9:30.

A. How long was the movie?

B. Show or tell how you found your answer.

5. Mark started playing tennis at 3:35. He played for 55 minutes.

A. What time did Mark stop playing tennis?

B. Show or tell how you found your answer.

6. Sara was at the ice rink for 125 minutes.

A. How long is 125 minutes in hours and minutes?

B. If Sara left the ice rink at 5:45, what time did she arrive?