

- 7. **A.** 1 hour, 30 minutes
B. 5:45
- 8.* **A.** 2 hours, 10 minutes
B. 5:40
- 9. 2:05
- 10. 3:20
- 11. 1 hour, 5 minutes
- 12. 3 hours, 10 minutes

- 7. Romesh said it took him 90 minutes to do his homework.
 - A.** How long is 90 minutes in hours and minutes?
 - B.** If Romesh started his homework at 4:15, what time did he finish?
- 8. Mara said it took her 130 minutes to do her homework.
 - A.** How long is 130 minutes in hours and minutes?
 - B.** If Mara started her homework at 3:30, what time did she finish?
- 9. Tara's watch shows 3:10. What time was it one hour and 5 minutes ago?
- 10. Jason's watch shows 5:40. What time was it two hours and 20 minutes ago?
- 11. Mark's watch showed 11:25. Later, it showed 12:30. How much time had passed?
- 12. Levi's watch shows 7:55. Earlier, it showed 4:45. How much time has passed?

Copyright © Kendall Hunt Publishing Company

Student Guide - Page 154

Student Activity Book

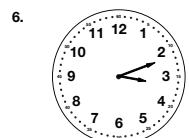
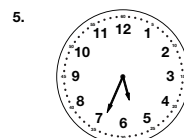
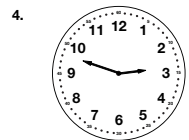
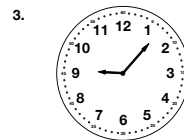
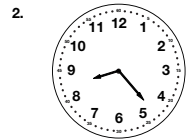
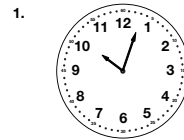
**Time to the Nearest Minute (SAB p. 217)
Questions 1–6**

- 1. 10:03
- 2. 8:23
- 3. 9:07
- 4. 2:48
- 5. 5:34
- 6. 3:12

Name _____ Date _____

Time to the Nearest Minute

Write the time shown on each clock. Give the time to the nearest minute. Use your individual clocks to help you.



Copyright © Kendall Hunt Publishing Company

Student Activity Book - Page 217

*Answers and/or discussion are included in the lesson.