

Multiplication Facts Strategies





Self-Check: Questions 1–8

Show at least one way to solve each multiplication fact. Use drawings, number lines, and rectangles to show your strategy. Decide if you have a strategy or need a strategy and put an “X” in the appropriate box in each table.



1. 2×8

Twos

 I need a strategy.	 I have a strategy.



2. 3×4

Threes

 I need a strategy.	 I have a strategy.



3. 5×4

Fives

 I need a strategy.	 I have a strategy.


4. 7×10

Tens


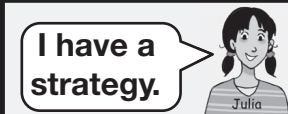
5. 9×3

Nine

6. 6×6

Square Numbers

7. Show or tell your partner why $0 \times 5 = 0$.

8. Show or tell your partner why $1 \times 8 = 8$.