
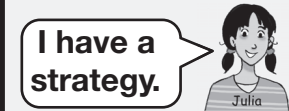


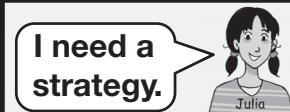

4.  $7 \times 10$

**Tens**



5.  $9 \times 3$

**Nine**

6.  $6 \times 6$

**Square Numbers**

7. Show or tell your partner why  $0 \times 5 = 0$ .

8. Show or tell your partner why  $1 \times 8 = 8$ .