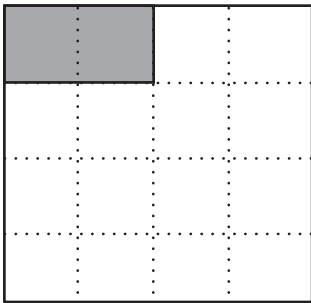


3. What fraction of each large square is shaded? Show your answer in symbols and words. Use the *Writing Numbers in Words* page in the Reference section of the *Student Guide*.

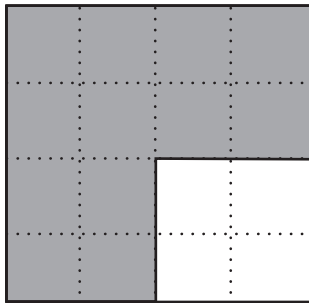
A.



Number _____

Words

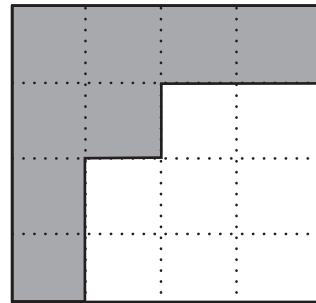
B.



Number _____


Words

C.



Number _____

Words

4. If  is one-fourth, show one whole.

