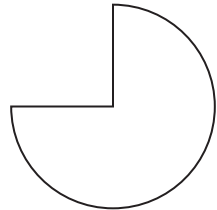


# Naming Wholes and Parts



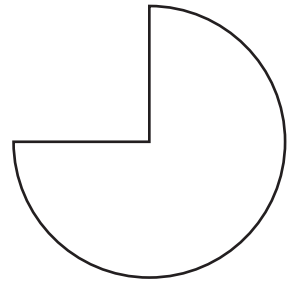
## Homework

1. Carla, Emily, and Roberto want to share this leftover pizza. Show how to divide the leftover pizza fairly.




2. If this  is one unit whole, then shade one-third.

3. Mark's family is putting in a patio in the backyard. It will have this shape. Show how the contractor can divide the area into sixths to pour concrete.



4. If this  is one-half of a granola bar, draw one whole bar.

5. If this  is one-fourth of a chocolate bar, draw  $\frac{3}{4}$  of the bar.

6. If this  is  $\frac{1}{2}$  of a pan of brownies, draw the whole pan.