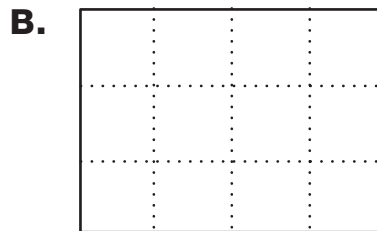
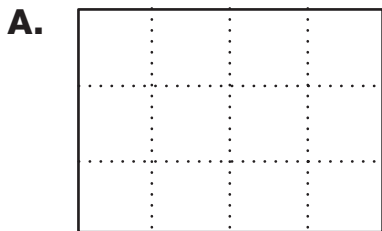
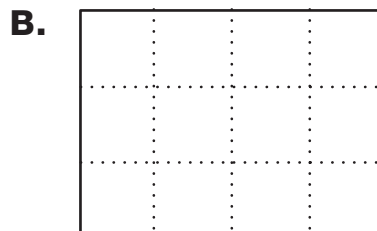
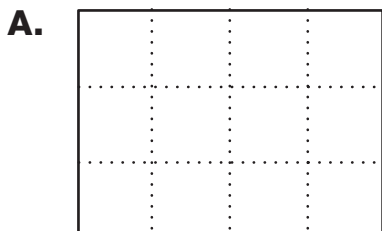


Fraction Challenge

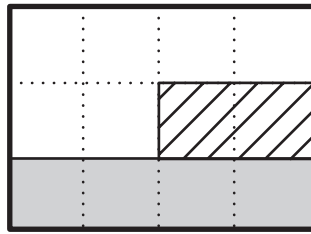
1. Divide each rectangle into thirds. Show two ways. Tell how you know the rectangles are divided into thirds.



2. Divide each rectangle into sixths. Show two ways. Tell how you know the rectangles are divided into sixths.

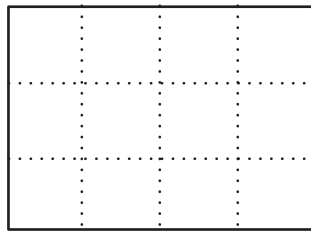


3. Use the rectangle below for Questions 3A, 3B, and 3C. Show or tell how you know.



- A. Name a fraction for the part shaded with stripes.
- B. Name a fraction for the part that is shaded gray.
- C. Name two fractions for the part that is shaded white.

4. If the rectangle shown is one whole, what number does each shaded shape represent?



Unit Whole

