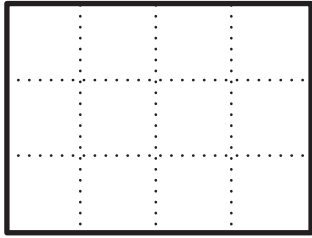


More Fraction Rectangles

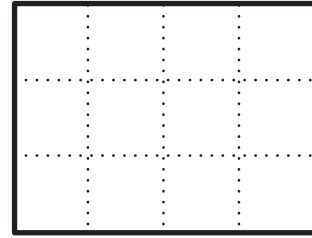


Homework

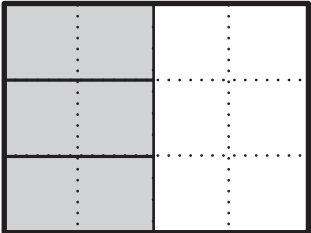
1. Shade $\frac{2}{3}$ of the rectangle.

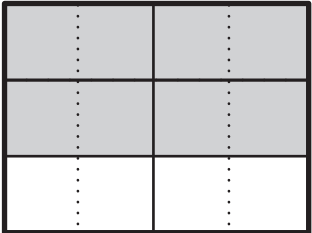


2. Shade $\frac{5}{6}$ of the rectangle.

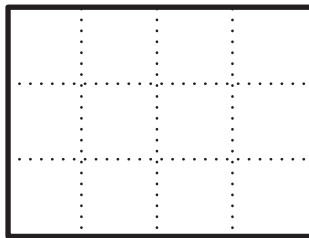


3. Write two fractions for the shaded part of the rectangle.

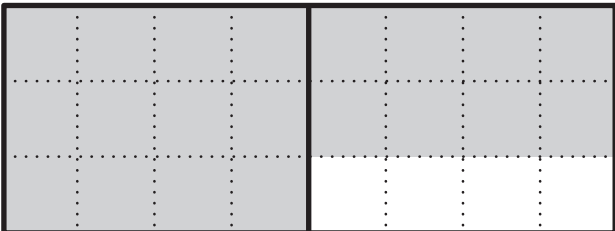
A.  _____

B.  _____

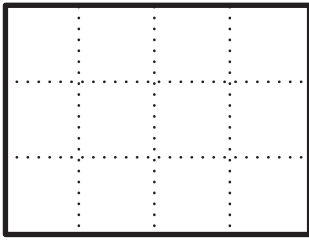
4. If this is the unit whole, write a number for the shaded part below.



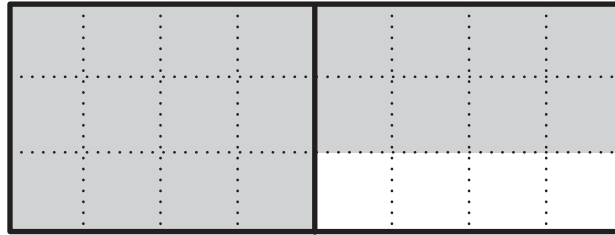
Unit Whole


 _____

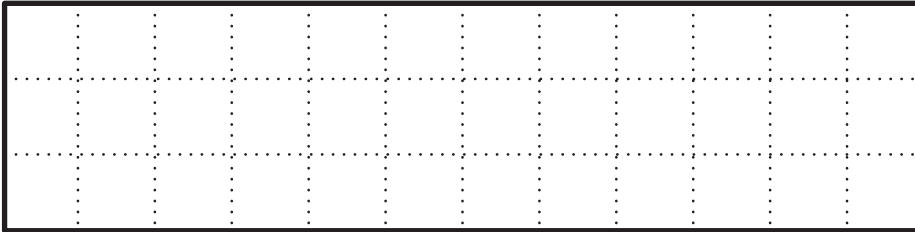
5. If this is the unit whole, write a number for the shaded part below.

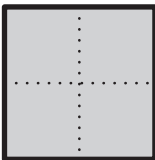


Unit Whole



6. If  is $\frac{1}{5}$, show the unit whole.



7. If  is $\frac{1}{8}$, show the unit whole.

