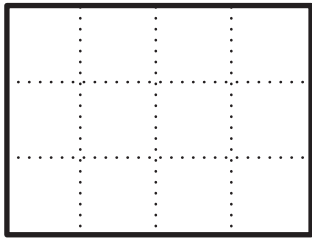


# More Fraction Rectangles

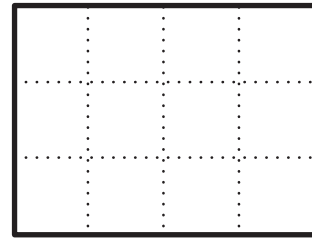


## Homework

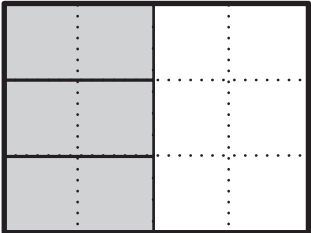
1. Shade  $\frac{2}{3}$  of the rectangle.

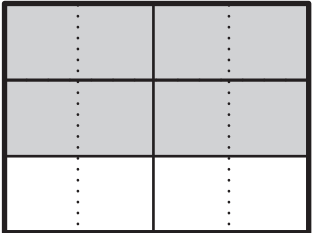


2. Shade  $\frac{5}{6}$  of the rectangle.

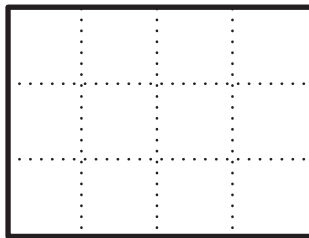


3. Write two fractions for the shaded part of the rectangle.

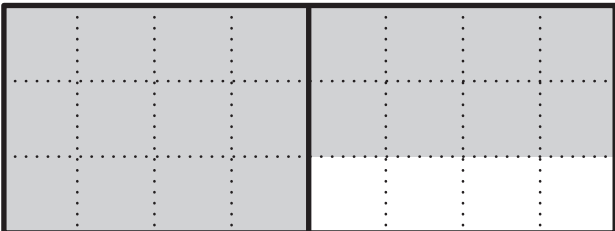
**A.**  \_\_\_\_\_  
\_\_\_\_\_

**B.**  \_\_\_\_\_  
\_\_\_\_\_

4. If this is the unit whole, write a number for the shaded part below.



Unit Whole

 \_\_\_\_\_