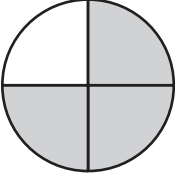
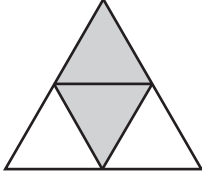


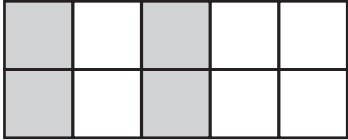
S More Parts and Wholes

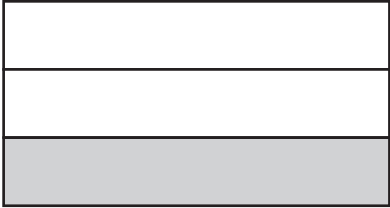


What part of the shapes are shaded? Write the fraction in words or as a number. Use the *Writing Numbers in Words* page in the *Student Guide Reference* section.

A.  _____

B.  _____

C.  _____

D.  _____

E. Which shape has half of the unit whole shaded? Explain how you know.