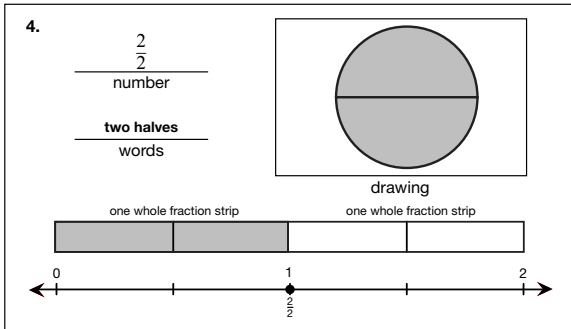
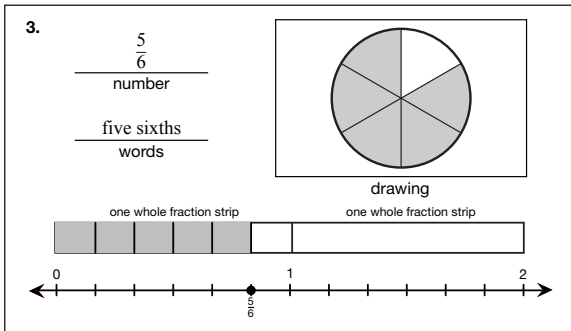
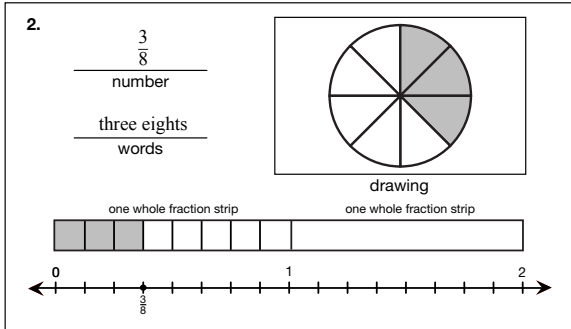
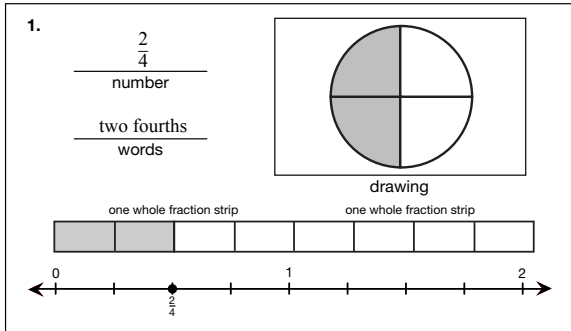


**Student Activity Book**

**Many Ways to Show a Fraction**  
(SAB pp. 355–358)

**Questions 1–8**

Possible responses:

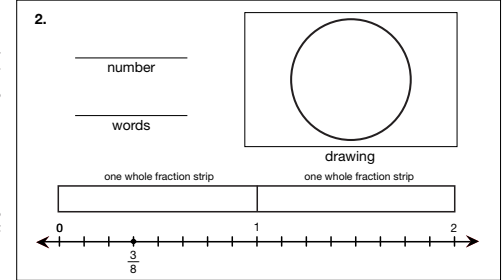
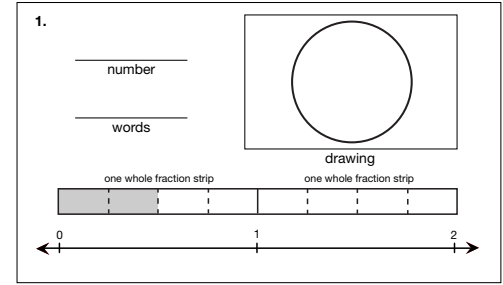


Copyright © Kendall Hunt Publishing Company

Name \_\_\_\_\_ Date \_\_\_\_\_

**Many Ways to Show a Fraction**

Show the fraction in each box in four other ways. The red circle is the unit whole for Questions 1–7.



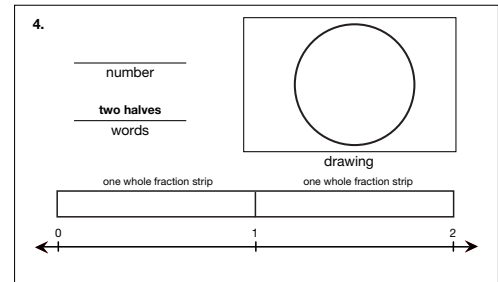
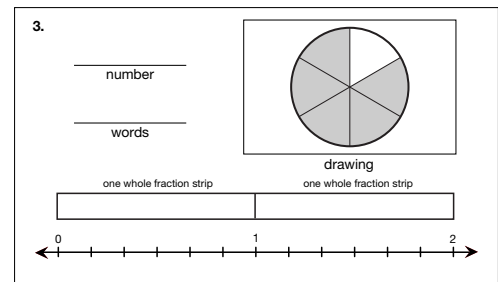
Copyright © Kendall Hunt Publishing Company

Circles, Fraction Strips, and Number Lines

SAB • Grade 3 • Unit 9 • Lesson 5 355

**Student Activity Book - Page 355**

Name \_\_\_\_\_ Date \_\_\_\_\_



Copyright © Kendall Hunt Publishing Company

356 SAB • Grade 3 • Unit 9 • Lesson 5

Circles, Fraction Strips, and Number Lines

**Student Activity Book - Page 356**

# Answer Key • Lesson 5: Circles, Fraction Strips, and Number Lines

Name \_\_\_\_\_ Date \_\_\_\_\_

5.

\_\_\_\_\_ number

\_\_\_\_\_ words

drawing

one whole fraction strip      one whole fraction strip

6.

\_\_\_\_\_ number

\_\_\_\_\_ words

six-eighths

drawing

one whole fraction strip      one whole fraction strip

Copyright © Kendall Hunt Publishing Company

Circles, Fraction Strips, and Number Lines      SAB • Grade 3 • Unit 9 • Lesson 5 357

Student Activity Book - Page 357

5.

$\frac{2}{6}$

number

two sixths

words

drawing

one whole fraction strip      one whole fraction strip

6.

$\frac{6}{8}$

number

six-eighths

words

drawing

one whole fraction strip      one whole fraction strip

Name \_\_\_\_\_ Date \_\_\_\_\_

7.

\_\_\_\_\_ number

\_\_\_\_\_ words

drawing

one whole fraction strip      one whole fraction strip

8. Draw a set of objects and show the fraction.

$\frac{1}{4}$

number

\_\_\_\_\_ words

drawing

one whole fraction strip      one whole fraction strip

Copyright © Kendall Hunt Publishing Company

358 SAB • Grade 3 • Unit 9 • Lesson 5      Circles, Fraction Strips, and Number Lines

Student Activity Book - Page 358

7.

$1\frac{2}{3}$

number

one and two thirds

words

drawing

one whole fraction strip      one whole fraction strip

8. Draw a set of objects and show the fraction.

$\frac{1}{4}$

number

one fourth

words

drawing

one whole fraction strip      one whole fraction strip

Copyright © Kendall Hunt Publishing Company