
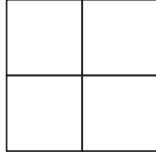


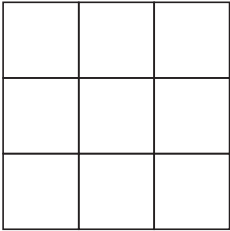
# **P** Squares




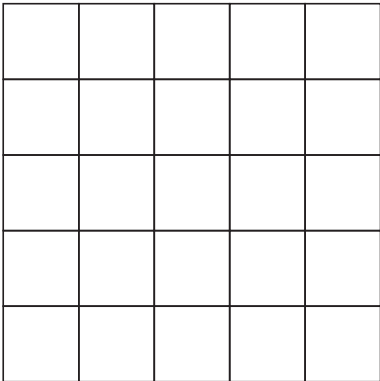
Find the area of the squares.

A.  1 cm  
1 cm \_\_\_\_\_

B.  \_\_\_\_\_

C.  \_\_\_\_\_

D.  \_\_\_\_\_

E.  \_\_\_\_\_

F. What is the area of a 6 cm  $\times$  6 cm square? \_\_\_\_\_

G. What is the area of a 7 cm  $\times$  7 cm square? \_\_\_\_\_

H. Look at the areas found in Questions A–E. Why do we call these numbers square numbers? Give an example.