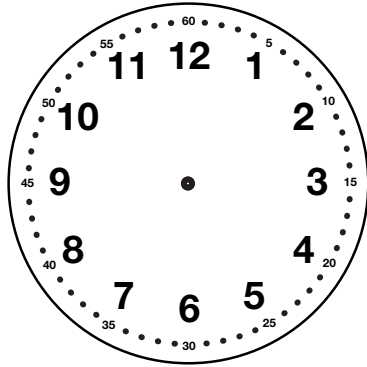


Q Fractions on the Clock



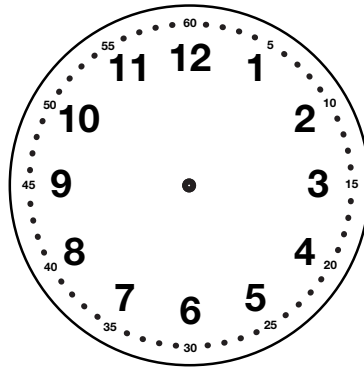
Draw the hands on the clock for the following times. What fraction of the hour is shown with the hands?

A. 12:30



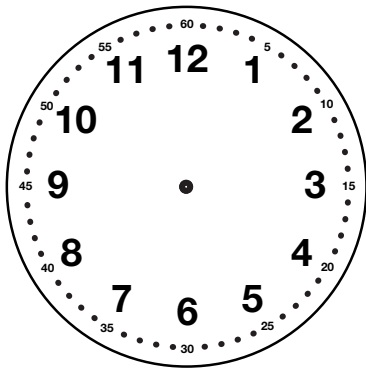
Fraction _____

B. 12:15



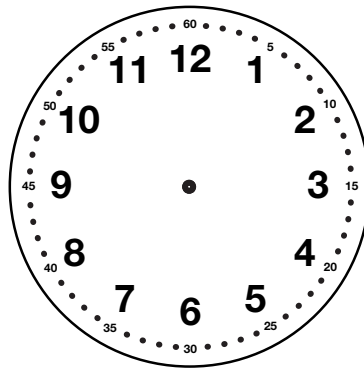
Fraction _____

C. 12:20



Fraction _____

D. 12:10



Fraction _____