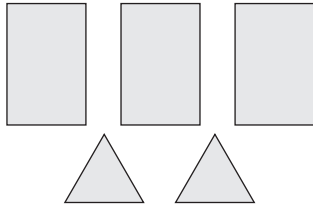
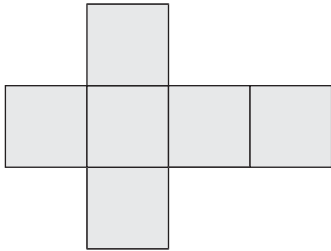


4. Look at the faces of the 3-D shape. Write the number of the shape on the line next to the drawing of the faces.

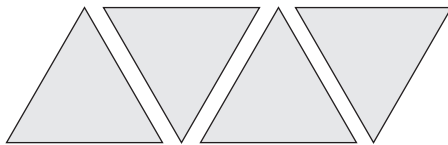
A.



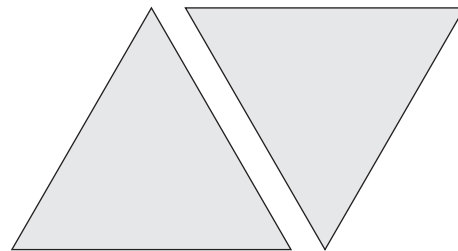
B.



C.



D. Luis is playing Guess My Shape and is only showing some of the faces of a 3-D shape. What shapes could he be showing you? Explain your thinking.



E. Luis shows another shape. What shapes could he be showing you now? Explain your thinking.

