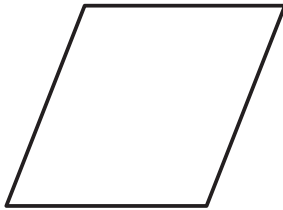


# **C** Regular Shapes



A regular shape has equal sides and equal angles. Circle the regular shapes. You will need a ruler.

A.



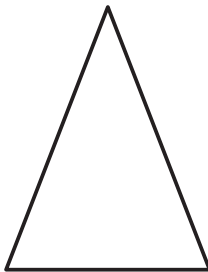
B.



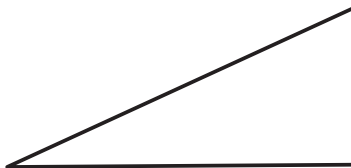
C.



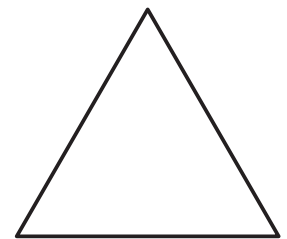
D.



E.



F.



G. Explain why you decided to circle (or not circle) Shape A.