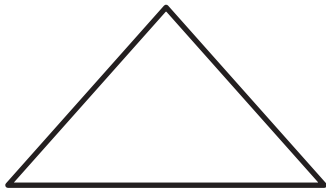


O Tangram Symmetry

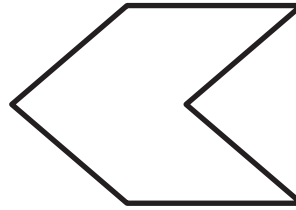


Chris and Suzanne used their tans to make these shapes. Use a ruler to draw a line of symmetry for each shape.


A.



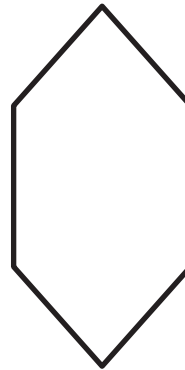
B.



C.



D.



P Making Sandwiches



Luis is making sandwiches. He has three kinds of meat: roast beef, turkey, and ham; and three kinds of bread: white, wheat, and rye. How many different sandwiches can Luis make if he uses only one kind of meat and one kind of bread for each sandwich? Show or tell how you found your answer.