


S Corners and Sides



Find the number of corners and sides for each shape below.


1.



corners _____

sides _____

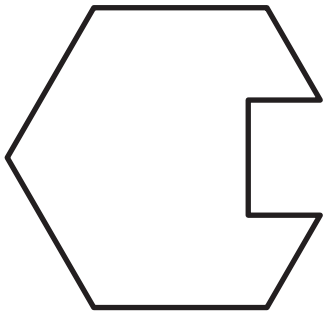
2.



corners _____

sides _____

3.



corners _____

sides _____