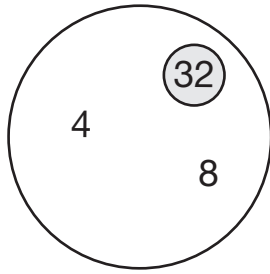
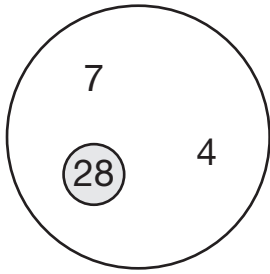


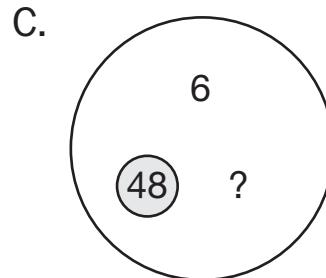
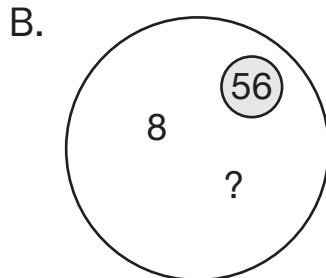
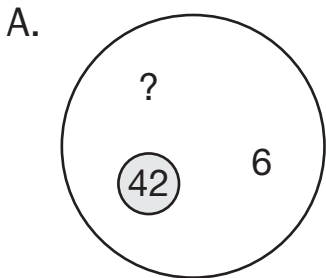
S Fact Family Quiz: Last Six Facts



1. Why do the numbers in each circle belong together?

2. Why is one number circled?

3. Which number is missing in each circle?



4. Explain how you found the answer for Question 3B.