
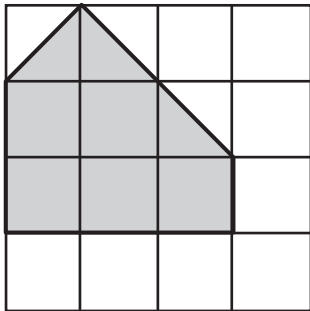


F Area

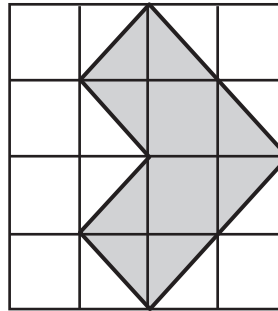


Find the area of the shaded shapes.

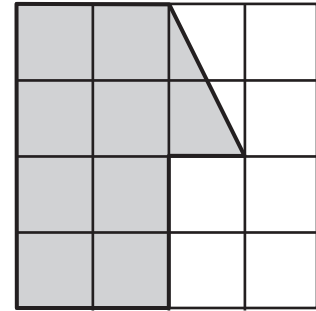
One square cm 



A



B



C

G Multiplication: Last Six Facts



Do these problems in your head. Write only the answers.

A. $8 \times 4 =$

B. $6 \times 7 =$

C. $8 \times 7 =$

D. $4 \times 7 =$

E. $6 \times 4 =$

F. $8 \times 6 =$

G. Explain your strategy for 4×7 .