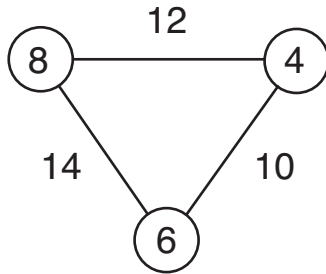


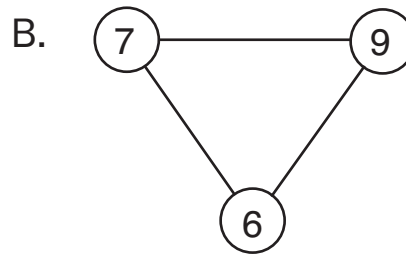
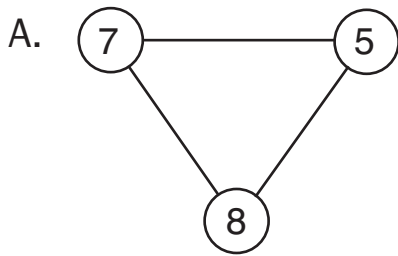
A Triangle Sums 1



1. What do you notice about the numbers in this triangle?



2. Find the missing numbers in these triangles.



B Addition Practice



- A. $20 + 30 + 10 =$
- B. $40 + 10 + 20 =$
- C. $50 + 40 + 20 =$
- D. $60 + 60 + 10 =$
- E. $70 + 60 + 20 =$
- F. Show or tell how you solved Question E.