

Name \_\_\_\_\_

Date \_\_\_\_\_



## Reading Time



Tell what time each clock face is showing.

1.



\_\_\_\_\_

2.




\_\_\_\_\_

3.



\_\_\_\_\_

4.



\_\_\_\_\_

5.




\_\_\_\_\_

6.




\_\_\_\_\_

7.



\_\_\_\_\_

8.



\_\_\_\_\_



## More Addition Practice



A.  $70 + 40 =$

B.  $60 + 50 + 20 =$

C.  $80 + 50 =$

D.  $60 + 90 =$

E.  $130 + 90 =$

F. Show or tell how you solved Question E.