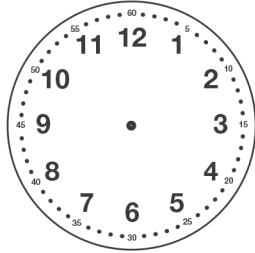


Part 7 Time

Read the time on the clock, and then draw the same time on the other clock.

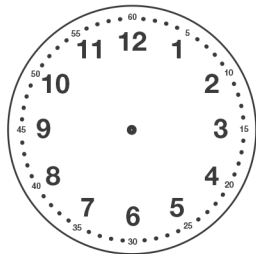
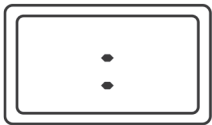
1.



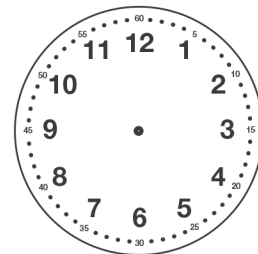
2.

Write the times on the digital and analog clocks.

3. What time is it now?



4. What time is your bedtime?



Estimate the time.

5. About how many hours until your bedtime?

6. About how many hours ago did you wake up?

7. About how many hours until your next school day begins?