


# Area and Perimeter Practice

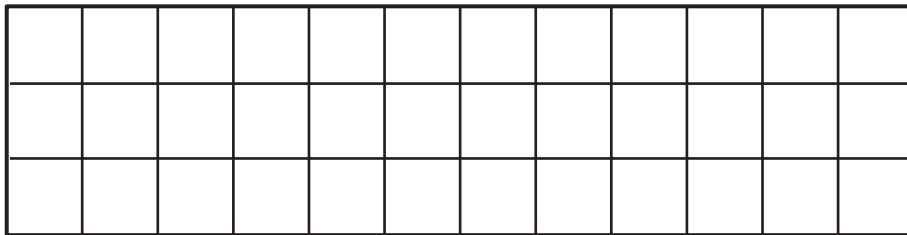
## Finding Area and Perimeter

1. Find the area and perimeter of each shape. Write a number sentence to show how you found each perimeter.

The grid squares in these shapes have an area of 1 square centimeter.

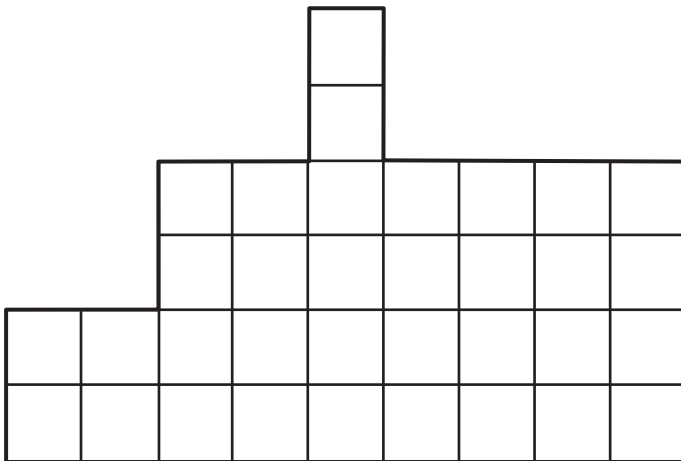


   A.



Area: \_\_\_\_\_ Perimeter: \_\_\_\_\_

   B.



Area: \_\_\_\_\_

Perimeter: \_\_\_\_\_

   C.



Area: \_\_\_\_\_ Perimeter: \_\_\_\_\_