






Check-In: Question 3

-    **3.** Draw two more shapes that have a perimeter of 30 cm in the square-centimeter grid below. Find the area of each shape.

