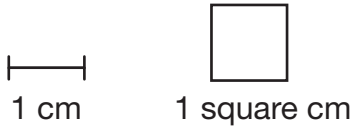
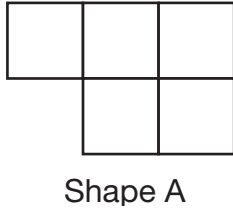


# J Area and Perimeter

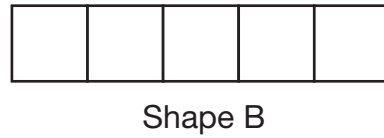


Be sure to include the unit of measurement in your answers.

1. What is the area of Shape A?



2. What is the area of Shape B?



3. What is the perimeter of Shape A? \_\_\_\_\_

4. What is the perimeter of Shape B? \_\_\_\_\_

5. Sketch a third shape with the same area as Shape A. Then, find its perimeter.

