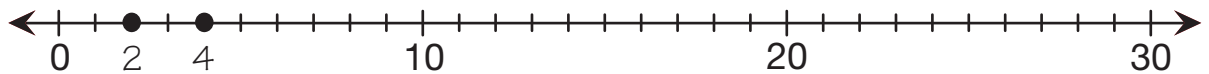
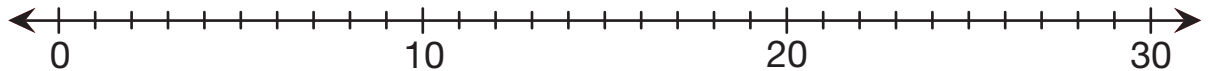


# Factors and Multiples on the Number Line

- 1.** Skip count to name the multiples of 2 up to 30. Mark the multiples of 2 on this number line. The first 2 are done for you.

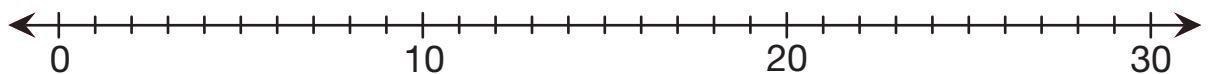


- 2. A.** Skip count to name the multiples of 3 up to 30. Mark the multiples of 3 on this number line.



- B.** Which of the numbers you marked have 3 as a factor? How do you know?

- 3. A.** Mark the multiples of 5 on this number line.



- B.** Is 5 a factor of all the numbers you marked? How do you know?