

## Choosing a Strategy




### Self-Check: Questions 26–28

Solve each of the following problems using an appropriate strategy. Choose from mental math strategies, paper-and-pencil strategies, and estimation strategies. Show your written work. Be prepared to explain your thinking.

**26.** Room 204 collected between 150 and 160 box tops each week. About how many will they collect in 3 weeks?

**27.** Mrs. Dewey’s class collected 391 box tops and Mr. Bookler’s class collected 408 box tops. How many did they collect altogether?

**28.** Mr. Trimmer’s class collected 284 box tops during 3 weeks. The class collected 149 the first week. How many box tops were collected during the last two weeks?

Workshop Menu			
Can I Do This?	▲ Working On It!	● Getting It!	■ Got It!
	 <p>I could use some extra help.</p>	 <p>I just need some more practice.</p>	 <p>I’m ready for a challenge.</p>
Choose an appropriate addition or subtraction strategy.	Questions 29–30, 33–35	Questions 30–35	Questions 31–35