


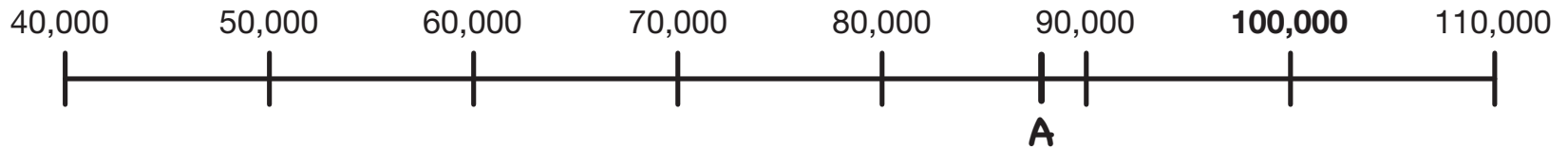





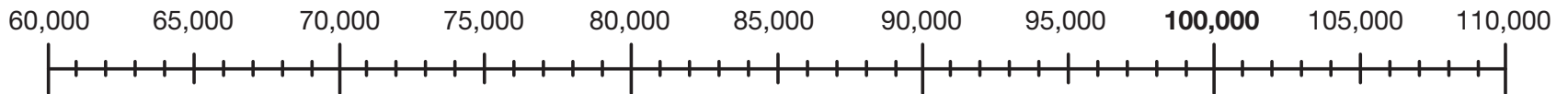
Use the Stadiums, Teams, and Cities Table in the *Student Guide* to complete the number lines.

-    **12.** Locate the numbers of seats in each stadium on the number line below. Label your marks with the letter in the table for each stadium. The first one is an example.



### Check-In: Questions 13–14

-    **13.** Locate the number of seats for the five football stadiums on the number line below. Label your marks with the correct letter C, D, E, F, and G or the names of the stadiums.



-    **14.** Write the names of the football stadiums in order from the smallest to largest number of seats.

\_\_\_\_\_