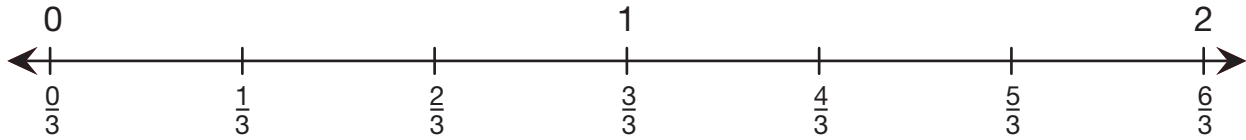


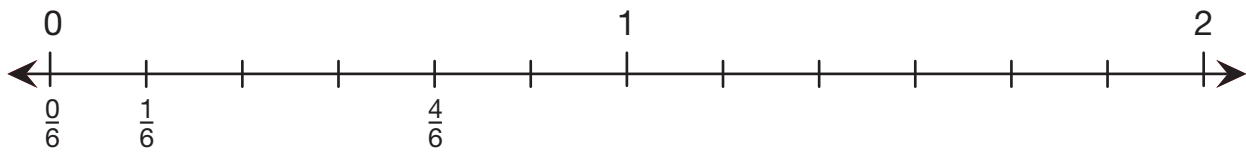
3. Here is the part of the number line from 0 to 2. It is labeled with thirds:



A. Which fraction shown is equivalent to 1? _____

B. Name a fraction shown that is between 1 and 2. _____

4. Here is the part of the number line from 0 to 2:

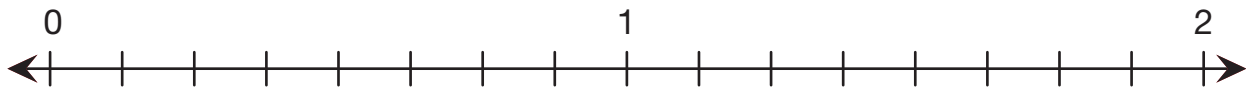


A. Finish labeling the number line above to show sixths using improper fractions.

B. Name a fraction you labeled that is equivalent to 2. _____

C. Name a fraction you labeled that is between 0 and 1. _____

5. Here is another number line from 0 to 2.



A. Label each mark on the number line.

B. Name a fraction you labeled that is between 0 and 1. _____

C. Name a fraction you labeled that is between 1 and 2. _____