


Representing Fractions

Show the given numbers with both rectangles and number lines.

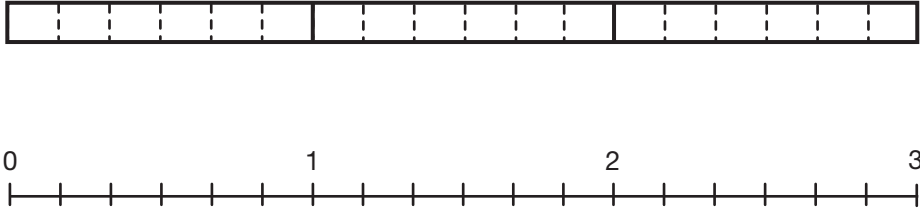
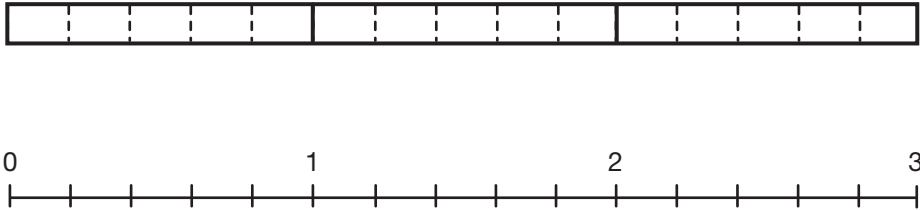
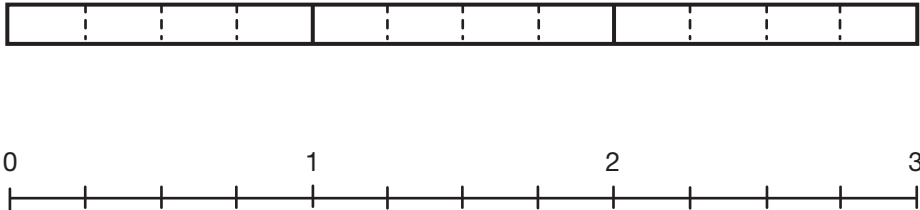
For rectangles, this size rectangle is the unit whole:



For number lines, the segment from 0 to 1 is the unit whole:



Number	Representations
<p>Example</p> $1\frac{3}{4}$	
<p>A.</p> $\frac{3}{4}$	
<p>B.</p> $\frac{7}{4}$	
<p>C.</p> $1\frac{1}{2}$	

Number	Representations
<p>D.</p> $2\frac{5}{6}$	
<p>E.</p> $\frac{10}{5}$	
<p>F.</p> $2\frac{1}{2}$	

Representing Fractions Feedback Box	Expectation	Check In	Comments
Represent fractions using fraction strips.	E1		
Locate fractions on a number line.	E1		
Represent fractions greater than one using number lines and fraction strips.	E5		