

Showing Fractions

Show, Write, and Draw Fractions

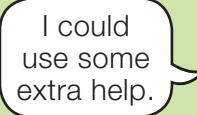

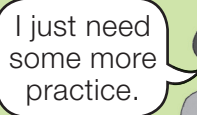

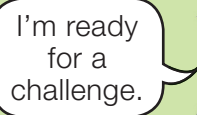



Self-Check: Question 1

1. **A.** Two aquas is what fraction of the red circle? _____
- B.** When you wrote the fraction as a number, how did you know what denominator to use? How did you know what numerator to use?

- C.** Write a number sentence for 1A. _____
- D.** Write the fraction in Question 1A in words. _____
- E.** Two aquas is what fraction of the pink piece? Show or tell how you know.

Use the menu and the Self-Check questions to choose practice with showing fractions and writing fractions in numbers and words.

Workshop Menu			
	▲ Working On It!	● Getting It!	■ Got It!
Can I Do This?	 	 	 
Show fractions with circle pieces and fraction strips. Order fractions on a number line. Show fractions with numbers, words, and drawings.	Questions 2, 3, 6–8, 12–15	Questions 3, 4, 7–10, 13–15	Questions 3–5, 8–11, 13–15