
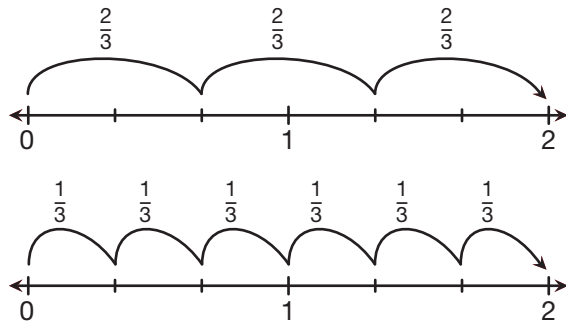


Multiply on Number Lines

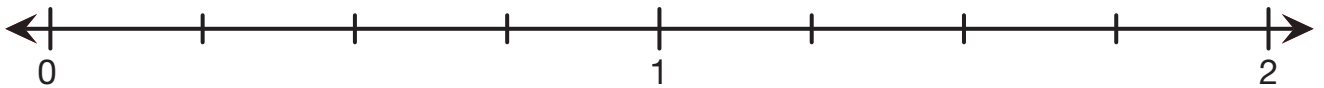
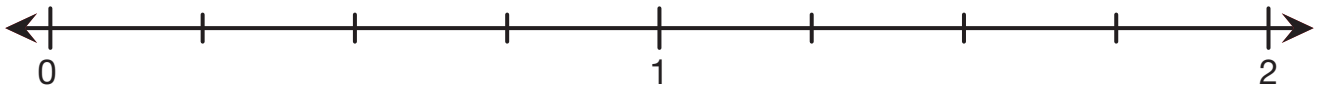
Maya used number lines to check if the following number sentence is true.

$$3 \times \frac{2}{3} = 6 \times \frac{1}{3}$$



Use number lines to decide if each number sentence is true. Circle the true number sentences.

1. $2 \times \frac{2}{4} = 4 \times \frac{1}{4}$



2. $4 \times \frac{3}{4} = 7 \times \frac{1}{4}$

