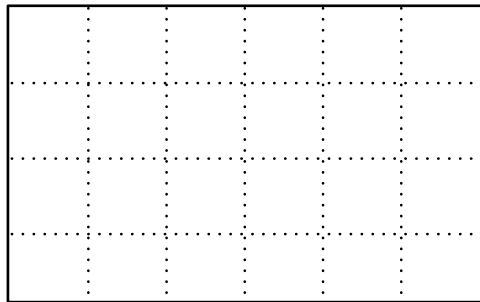



**Part 6** Fraction Rectangles and Strips

1. Shade  $\frac{2}{3}$  of the large rectangle.



2. Shade  $\frac{5}{8}$  of the large rectangle.

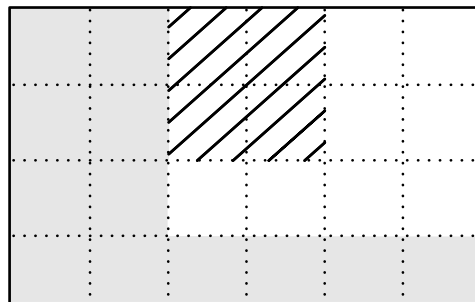


3. Use the large rectangle for Questions 3A, 3B, and 3C.

A. Name a fraction for the part with stripes.

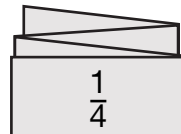
B. Name a fraction for the part that is gray.

C. Name a fraction for the part that is white.



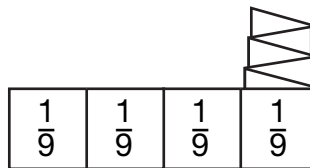
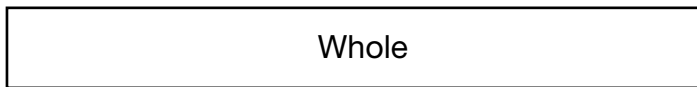
4. Write two names for the numbers shown with fraction strips below.

A.



\_\_\_\_\_

B.



\_\_\_\_\_