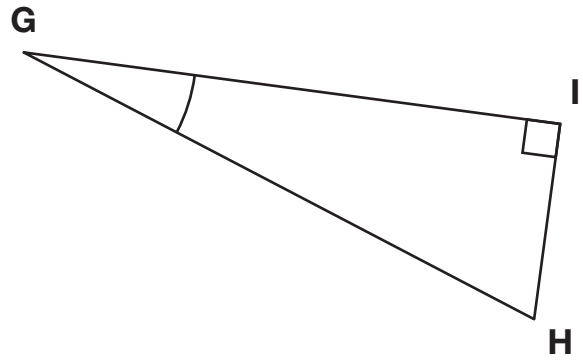


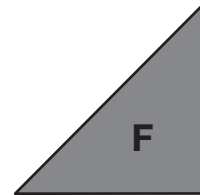
4. The sum of $\angle G$ and $\angle I$ is 110° . Find the measure of $\angle G$ and $\angle H$. Write the angle measure next to the angle.



5. Each number sentence shows how the angles in some Power Polygons™ are put together. Find the missing angle in each number sentence. Then match the number sentence to the picture it describes on the right.

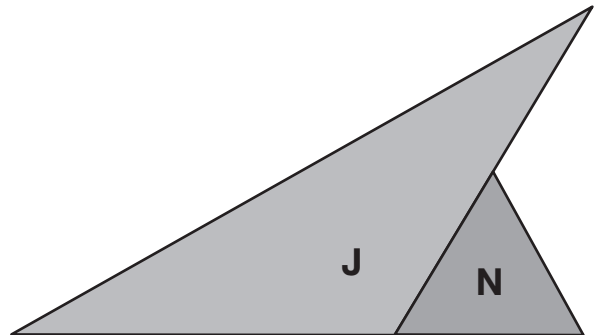
A. $30^\circ + n + 30^\circ = 90^\circ$

$n =$ _____



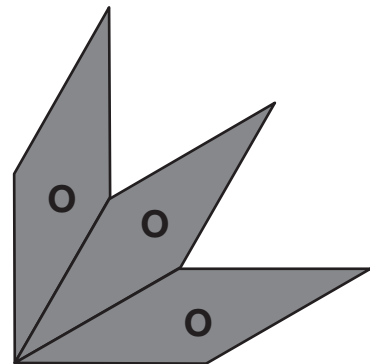
B. $60^\circ + 60^\circ + n = 180^\circ$

$n =$ _____



C. $45^\circ + 90^\circ + n = 180^\circ$

$n =$ _____



D. $120^\circ + n = 180^\circ$

$n =$ _____

