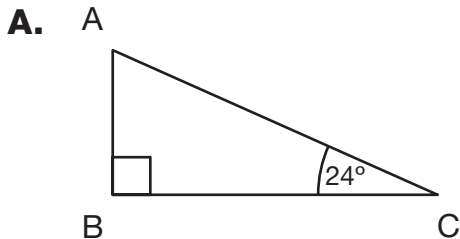


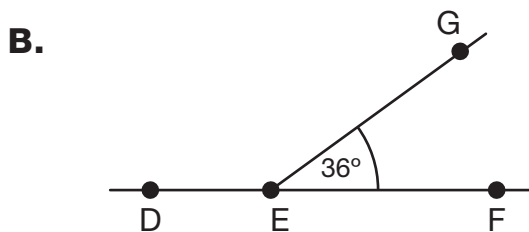
Add and Subtract Angles

Self-Check: Question 9

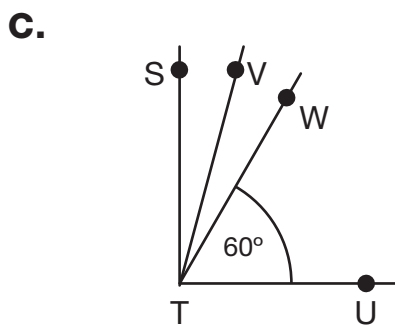
9. Without using a protractor, find the missing angle measures.



$\angle A =$ _____



$\angle DEG =$ _____






$\angle STV = 90^\circ$

$\angle STV = \angle VTW$

$\angle STV =$ _____

$\angle STW =$ _____

Use the Self-Check Question and menu to choose practice.

Workshop Menu			
<p>Can I Do This?</p> <p>Add and subtract angle measures.</p>	<p>▲ Working On It!</p> <p>I could use some extra help.</p>  <p>Jacob</p>	<p>● Getting It!</p> <p>I just need some more practice.</p>  <p>Ana</p>	<p>■ Got It!</p> <p>I'm ready for a challenge.</p>  <p>Nicholas</p>
	<p>Questions 10–11, 13, 15</p>	<p>Questions 11–14, 16</p>	<p>Questions 12–14, 17</p>