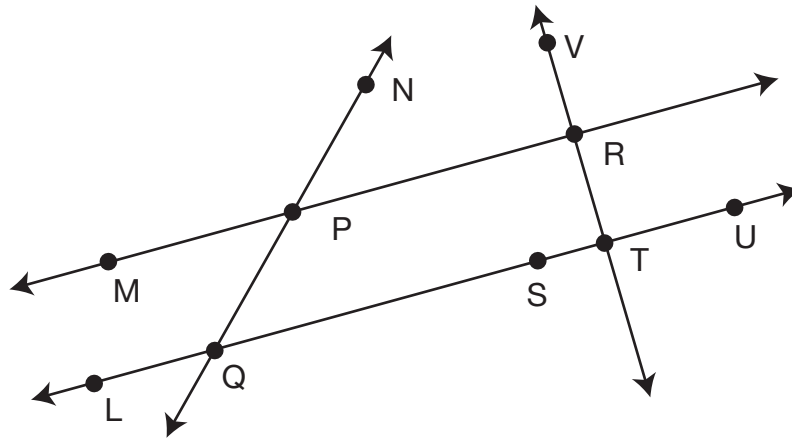


# Lines






## Self-Check: Questions 18–21



- 18. A.** Name one set of parallel lines. \_\_\_\_\_
- B.** Name two lines that are perpendicular to each other.  
\_\_\_\_\_
- 19. A.** Name a ray on the figure. \_\_\_\_\_
- B.** Name a line segment on the figure. \_\_\_\_\_
- C.** Find and name a quadrilateral on the figure. \_\_\_\_\_
- 20.** Use a protractor to draw a line perpendicular to  $\overleftrightarrow{VT}$ .
- 21.** Use a protractor to draw a line parallel to  $\overleftrightarrow{VT}$ .

Use the Self-Check Questions and menu to choose practice.

Workshop Menu			
<b>Can I Do This?</b>	<b>▲ Working On It!</b> I could use some extra help. 	<b>● Getting It!</b> I just need some more practice. 	<b>■ Got It!</b> I'm ready for a challenge. 
<b>Draw and identify lines that intersect, are perpendicular, or are parallel.</b>	<b>Questions 22–24</b>	<b>Questions 23–25</b>	<b>Questions 25–26</b>