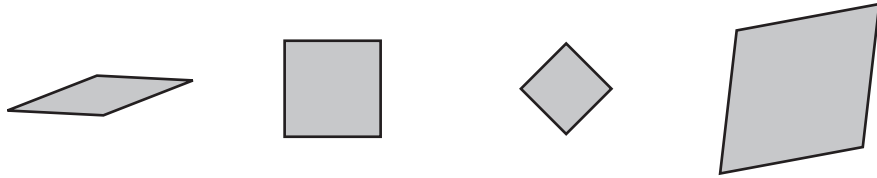


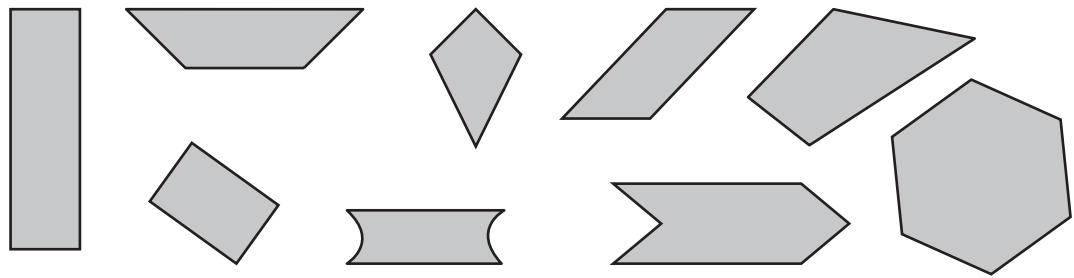


Check-In: Question 5

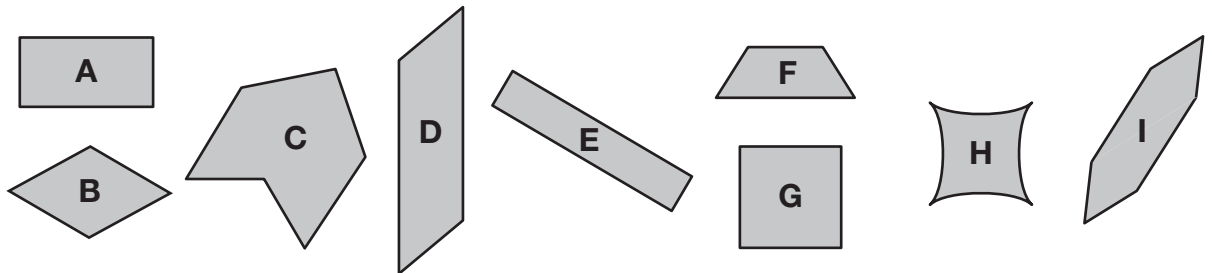
5. Each of these shapes is a **rhombus**:



None of these shapes is a rhombus:



A. Circle each shape below that is a rhombus.



B. List properties of rhombuses. To list a property of a rhombus, it must be true for all rhombuses. Be ready to justify your answers.

C. Explain why Shape F is or is not a rhombus.

D. Make a rhombus. Use 2 or more different Power Polygons™. Draw the outside edges of the shape.