



R What Time Is It?



Clock A



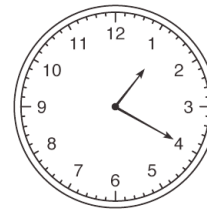
Clock B



Clock C



Clock D



Clock E

Match each statement with the clock that shows the correct time.

1. Irma started to read her book at 7:10. She read for 45 minutes. What time did she finish her reading? _____
2. Luis practiced his violin for 35 minutes. He started at 12:45. What time did he finish practicing? _____
3. Michael is allowed to play video games for 30 minutes after he finishes his homework. He finished his homework at 6:05. If he starts playing video games right away, what time will he finish? _____
4. After school, Anna and Grace went for a walk. They finished their walk at 4:35. If they walked for 20 minutes, what time did they start? _____
5. Keenya practiced the piano for 25 minutes. When she checked the clock it was 2:40. What time did Keenya start practicing? _____