



Part 4 Time

1. What time is shown on each clock below?

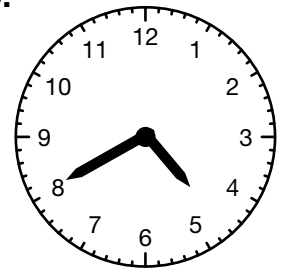
A.



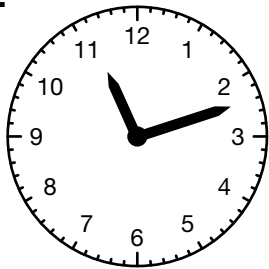
B.




C.




D.



E.



F.



2. **A.** Jackie began cleaning her room at 6:15 P.M. She finished two hours later. When did she finish?

- B.** John started watching cartoons when he woke up 1 hour and 15 minutes ago. It is now 10:00 A.M. What time did John wake up?

- C.** Jacob's mother has to pick him up from his aunt's house at 9:30 P.M. It takes 50 minutes to get there. What time should she leave her home?

- D.** Irma and her sister are making dinner for the family. They plan to eat at 6:30 P.M. The dinner takes 2 hours and 35 minutes to prepare. What time should they begin cooking?

- E.** How many minutes will it take Irma and her sister to prepare dinner?

- F.** How many hours is 600 minutes?

- G.** Which clock in Question 1 shows an acute angle?