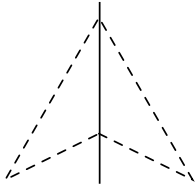


Student Activity Book

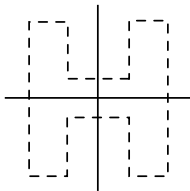
Finding Symmetry

Questions 1–3 (SAB pp. 353–355)

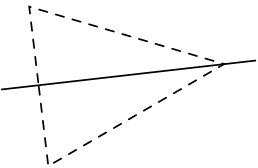
1. A.



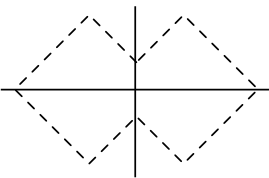
B.



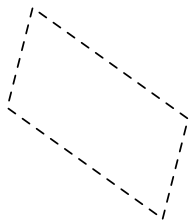
C.



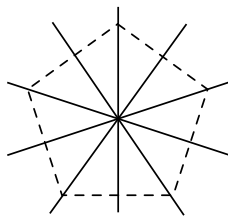
D.



E.



F.



2. Shapes B, D, and F have turn symmetry.
3. Shapes A, C, and E do not have turn symmetry.

Copyright © Kendall Hunt Publishing Company

Name _____ Date _____

Finding Symmetry

1. Cut out and fold each shape to identify the lines of symmetry. Tape or glue the shapes to a sheet of paper.

A.

B.

C.

Copyright © Kendall Hunt Publishing Company

Symmetry
SAB • Grade 4 • Unit 9 • Lesson 7 353

Student Activity Book - Page 353

Name _____ Date _____

D.

E.

F.

Copyright © Kendall Hunt Publishing Company

Symmetry
SAB • Grade 4 • Unit 9 • Lesson 7 355

Student Activity Book - Page 355