

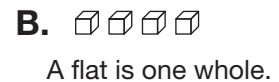
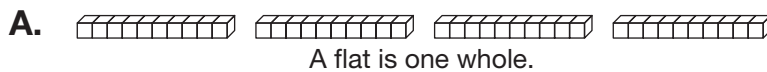
Moving Ahead with Decimals

Showing Decimals



Self-Check: Questions 1 and 2

1. Roberto and his friends showed *four-tenths* several ways. Circle those that are correct.

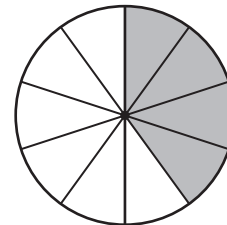


C. $\frac{4}{100}$

D. $\frac{4}{10}$

E. 0.4

F.



A circle is 1 whole.



A dollar is one whole.



A dollar is one whole.

2. A. Write 0.25 as a common fraction and with words. Use the *Writing Numbers with Words* page in the *Student Guide* Reference section.

- B. Show 0.25 two more ways.

